


Exercises

1) Estimate how many of these small squares




would fit into this large square.



2) Estimate how many of these small rectangles



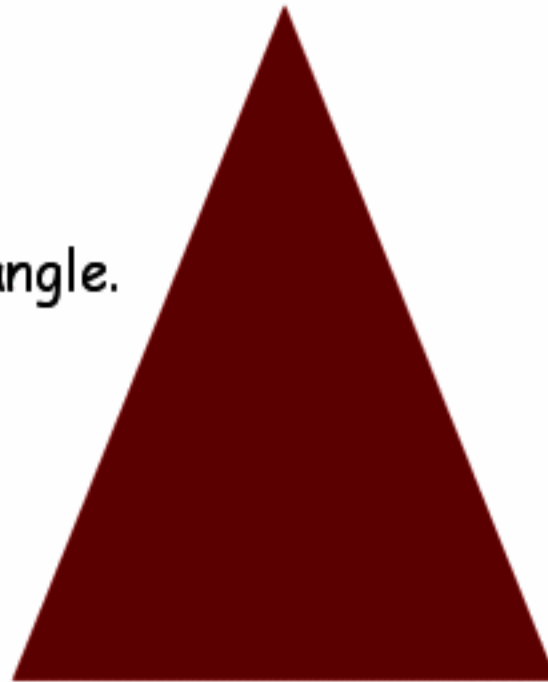
would fit into this large circle.



3) Estimate how many of these small circles



would fit into this large triangle.



4) Estimate how many of these small squares



would fit into this large square.



5) Estimate how many of these small triangles



would fit into this large square.



6) Estimate how many of these small circles



would fit into this large circle.



7) Estimate how many of these small rectangles



would fit into this large rectangle.



8) Estimate how many of these small circles




would fit into this large rectangle.



9) Estimate how many of these small squares




would fit into this large circle.



10) Estimate how many of these small triangles



would fit into this large triangle.



Result

