











Exercises

1) Write the number and spell it.



- a)  b) *zero* c) *nought*

2) Write and spell the number of spots in the squares.



- a)  b) *1* c)  d)  e)  f) 
- zero* *one* *two* *three* *four* *five*

3) Count and write the number of shapes

a)   _____ triangles

b)   _____ stars

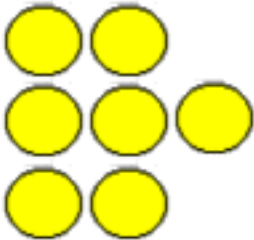
Count and write the number of shapes

c)

0 _____ hearts

d)

7 _____ circles



4) Let's do a countdown

10 9 8 7 6 5 4 3 2 1 0

10 9 8 7 6 5 4 3 2 1 0

5) a) *zero* means nothing.

b) Write the numeral for zero.

0

Result

16